

Free Worksheets

Ten Things Your Child Should Know

Build Fluency & Algebraic Thinking



Danita Smith


BLACK and Education 
Uplifting our children and communities

Copyright © 2022 Danita Smith, Red and Black Ink, LLC

Ten Things
Your Child
Should Know
about
Reading, Writing,
and Math

1st Grade

Danita Smith




Practice answering the questions that follow.

Build your math skills!

Find out if the equations are true or not.

True or Not True?



Circle the correct answers and show your work. 😎

1. $3 - 0 = 6 - 3$ True or Not True

2. $3 + 5 = 6 + 2$ True or Not True

3. $9 + 8 = 6 + 3$ True or Not True

4. $13 - 2 = 3 + 7$ True or Not True

5. $2 + 8 = 5 + 5$ True or Not True

True or Not True?



Circle the correct answers and show your work. 😎

1. $11 - 1 = 12 - 2$ True or Not True


2. $4 - 3 = 6 - 6$ True or Not True

3. $4 - 2 = 6 - 4$ True or Not True

4. $5 - 3 = 12 - 8$ True or Not True

5. $12 - 9 = 13 - 2$ True or Not True

True or Not True?



Circle the correct answers and show your work. 😎

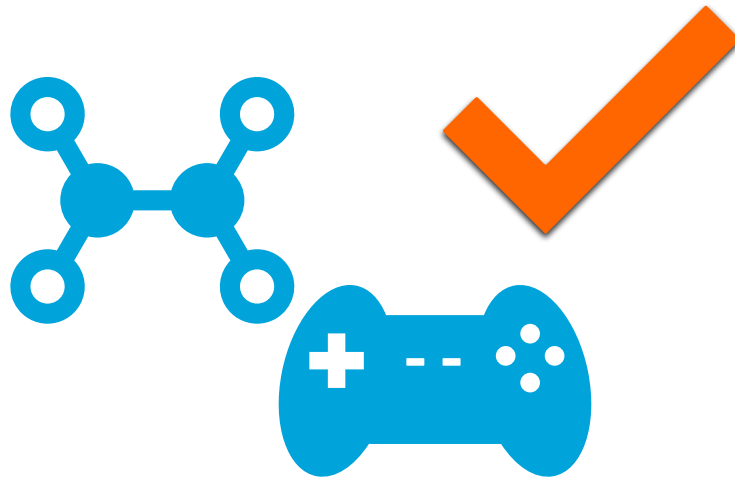
1. **$12 + 3 = 3 + 12$** True or Not True

2. **$8 + 3 = 7 + 7$** True or Not True

3. **$9 + 3 = 2 + 8$** True or Not True

4. **$3 + 9 = 12 + 0$** True or Not True

5. **$19 + 0 = 18 + 1$** True or Not True



Practice answering the questions that follow.

Build your math skills!

Find the missing numbers.

Find the Missing Number




Figure out what's missing. Find the answers. 😎

1. **12 + ? = 13**

2. **11 + ? = 14**

3. **4 + ? = 6**

4. **? + 5 = 13**

5. **4 + ? = 11**

6. **3 + ? = 3**

Find the Missing Number




Figure out what's missing. Find the answers. 😎

1. $5 + ? = 13$

2. $2 + ? = 12$

3. $17 + ? = 20$

4. $8 + ? = 17$

5. $3 + 4 = ?$

6. $7 + ? = 10$

Find the Missing Number



Figure out what's missing. Find the answers. 😎

1. $5 - ? = 3$


2. $3 - ? = 2$

3. $20 - ? = 19$

4. $2 - ? = 1$

5. $12 - ? = 5$

6. $7 - ? = 5$




Word Problems

Build your math skills!

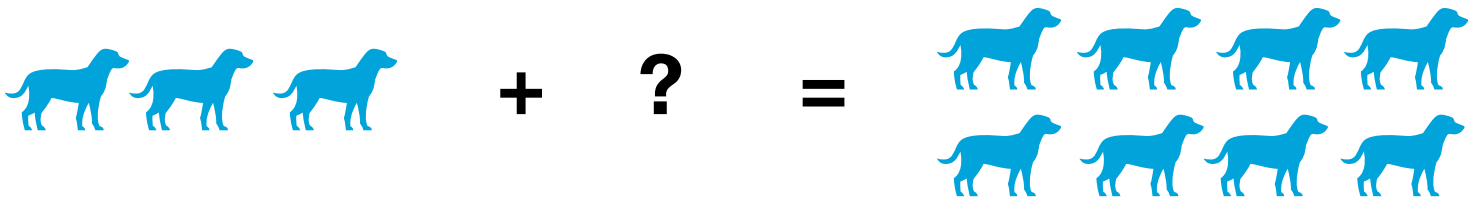
Figure out the answers.

Word Problems

1. John had ten basketballs, but he gave two of them away.
How many basketballs does he now have?



2. Anita has three dogs. She went visit her friend's dog farm and now she has a total of eight dogs. How many dogs did she get from the dog farm?



Word Problems

3. Neka has \$4 to spend at the candy store. She wants to spend \$2 on candy bars. How much money will she have left?



4. Brian has three ice cream cones. After going to the store, he now has 5 ice cream cones. How many cones did he get from the store?

